



Ostern 1

So viele bunte Ostereier, Groß und Klein!


Berechne durch Multiplizieren die Anzahl der Ostereier!




$$2 \cdot 3 = \underline{\quad}$$



$$2 \cdot 2 = \underline{\quad}$$



$$4 \cdot 4 = \underline{\quad}$$



$$5 \cdot 7 = \underline{\quad}$$




$$1 \cdot 4 = \underline{\quad}$$



$$3 \cdot 3 = \underline{\quad}$$



$$3 \cdot 2 = \underline{\quad}$$



$$4 \cdot 5 = \underline{\quad}$$