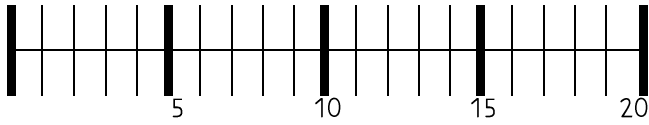


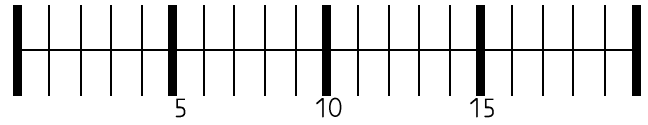
# Zahlenstrahl 7



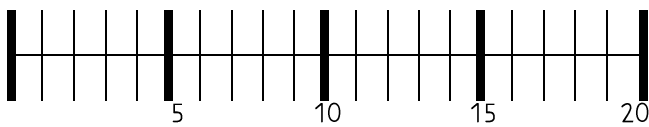
Zeichne ein und rechne.



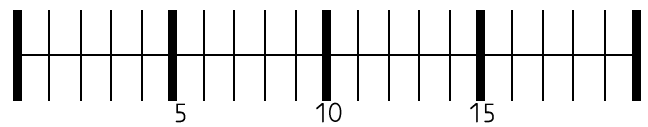
$$15 + 3 = \underline{\quad}$$



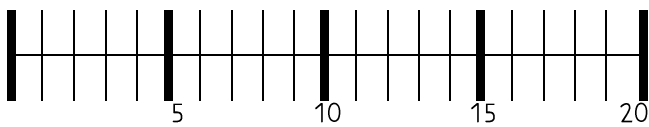
$$13 + 5 = \underline{\quad}$$



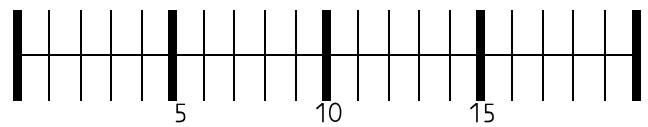
$$15 + 5 = \underline{\quad}$$



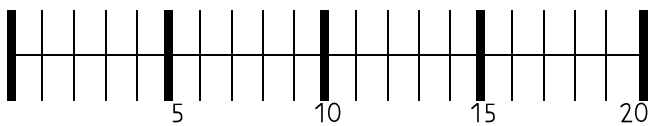
$$7 + 8 = \underline{\quad}$$



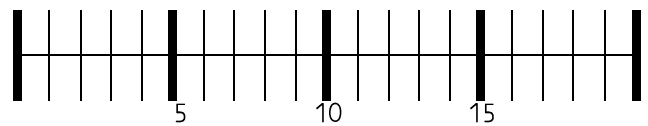
$$13 - 5 = \underline{\quad}$$



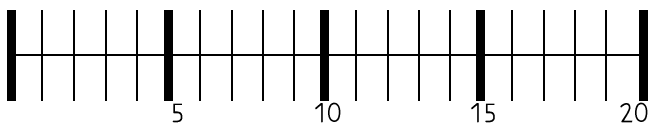
$$10 - 8 = \underline{\quad}$$



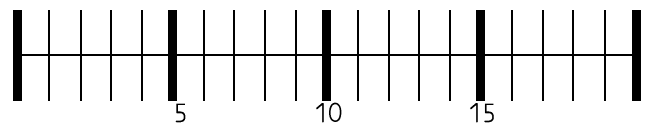
$$12 - 9 = \underline{\quad}$$



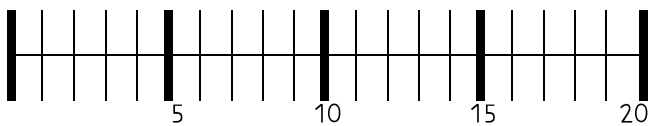
$$19 - 9 = \underline{\quad}$$



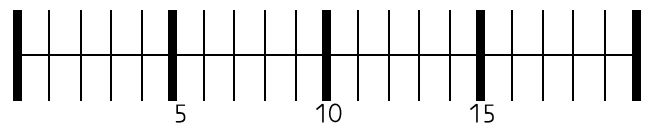
$$13 - 9 = \underline{\quad}$$



$$9 + 6 = \underline{\quad}$$



$$15 + 1 = \underline{\quad}$$



$$12 - 4 = \underline{\quad}$$