

1x1: 6er Aufgaben


Berechne die Anzahl der Punkte!




$$3 \cdot 6 = \underline{\quad}$$




$$2 \cdot 6 = \underline{\quad}$$




$$4 \cdot 6 = \underline{\quad}$$




$$7 \cdot 6 = \underline{\quad}$$



$$5 \cdot 6 = \underline{\quad}$$



$$9 \cdot 6 = \underline{\quad}$$



$$8 \cdot 6 = \underline{\quad}$$



$$1 \cdot 6 = \underline{\quad}$$