

1x1: 6er Aufgaben

(Lösung)


Berechne die Anzahl der Punkte!




$$3 \cdot 6 = 18$$




$$2 \cdot 6 = 12$$




$$4 \cdot 6 = 24$$




$$7 \cdot 6 = 42$$



$$5 \cdot 6 = 30$$



$$9 \cdot 6 = 54$$



$$8 \cdot 6 = 48$$



$$1 \cdot 6 = 6$$