


# 1x1: 7er Aufgaben

# (Lösung)


Berechne die Anzahl der Punkte!




$$3 \cdot 7 = 21$$




$$2 \cdot 7 = 14$$




$$4 \cdot 7 = 28$$




$$7 \cdot 7 = 49$$



$$5 \cdot 7 = 35$$



$$8 \cdot 7 = 56$$



$$6 \cdot 7 = 42$$



$$1 \cdot 7 = 7$$