


1x1: 9er Aufgaben


Berechne die Anzahl der Punkte!




$$3 \cdot 9 =$$




$$2 \cdot 9 =$$




$$4 \cdot 9 =$$




$$7 \cdot 9 =$$



$$5 \cdot 9 =$$



$$9 \cdot 9 =$$



$$8 \cdot 9 =$$



$$1 \cdot 9 =$$
