


# 1x1: 9er Aufgaben


Berechne die Anzahl der Punkte!




$$3 \cdot 9 = 27$$




$$2 \cdot 9 = 18$$




$$4 \cdot 9 = 36$$




$$7 \cdot 9 = 63$$



$$5 \cdot 9 = 45$$



$$9 \cdot 9 = 81$$



$$8 \cdot 9 = 72$$



$$1 \cdot 9 = 9$$