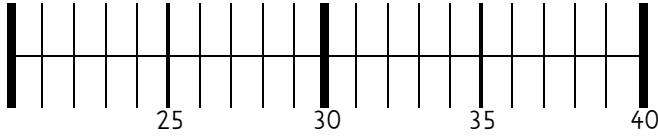


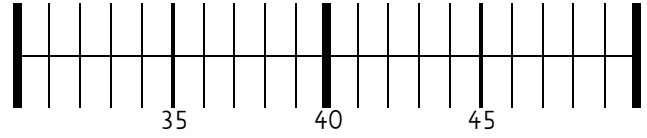


Zahlenstrahl - Subtraktion 1

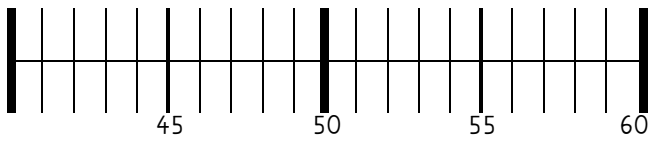
Rechne aus und zeichne das Ergebnis in den Zahlenstrahl ein.



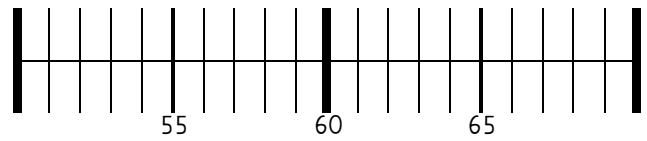
$$35 - 6 = \underline{\quad}$$



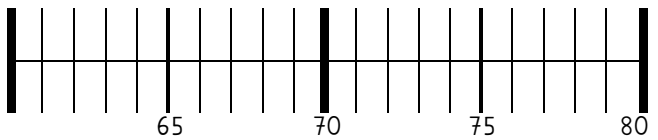
$$43 - 9 = \underline{\quad}$$



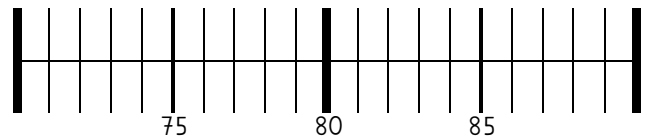
$$55 - 7 = \underline{\quad}$$



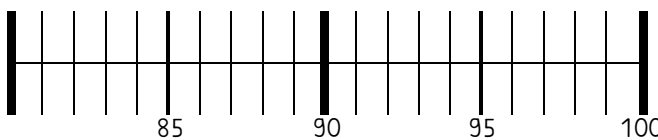
$$64 - 6 = \underline{\quad}$$



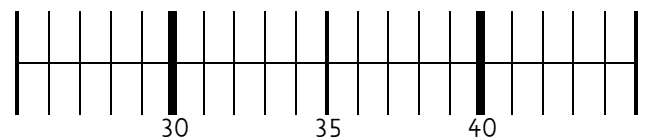
$$78 - 9 = \underline{\quad}$$



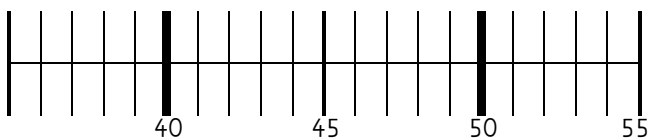
$$85 - 8 = \underline{\quad}$$



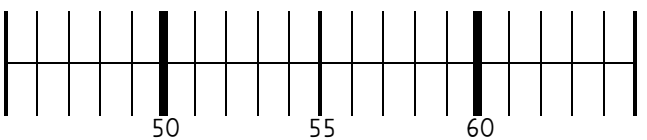
$$92 - 3 = \underline{\quad}$$



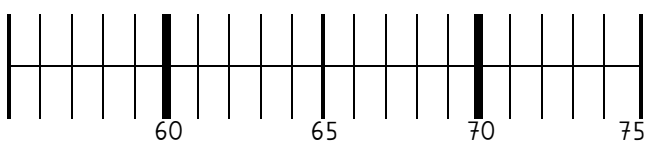
$$42 - 5 = \underline{\quad}$$



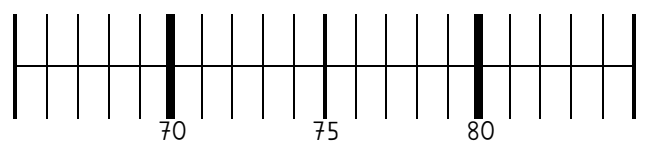
$$51 - 2 = \underline{\quad}$$



$$56 - 7 = \underline{\quad}$$



$$74 - 5 = \underline{\quad}$$



$$75 - 6 = \underline{\quad}$$