

Name:

Klasse:

Mathematik

Zeitaufgaben (volle Stunde) 2




1 Zeichne die Uhrzeit richtig ein!


17 : 00 Uhr



2 : 00 Uhr




9 : 00 Uhr




6 : 00 Uhr



14 : 00 Uhr




18 : 00 Uhr



13 : 00 Uhr



00 : 00 Uhr



16 : 00 Uhr

