

Name:

Klasse:

Mathematik

Zeitaufgaben (volle Stunde) 3




1 Zeichne die Uhrzeit richtig ein!


12 : 00 Uhr



1 : 00 Uhr




18 : 00 Uhr




19 : 00 Uhr



23 : 00 Uhr




7 : 00 Uhr



13 : 00 Uhr



8 : 00 Uhr



14 : 00 Uhr

