

Name:

Klasse:

Mathematik

# Zeitaufgaben (gemischt) 1




1 Zeichne die Uhrzeit richtig ein!


18 : 30 Uhr



12 : 00 Uhr




5 : 30 Uhr




3 : 00 Uhr



20 : 30 Uhr




15 : 30 Uhr



9 : 30 Uhr



23 : 30 Uhr



10 : 00 Uhr

