

Zeitaufgaben (gemischt) 4




1 Zeichne die Uhrzeit richtig ein!


18 : 15 Uhr



12 : 00 Uhr




5 : 45 Uhr




3 : 00 Uhr



20 : 15 Uhr




15 : 45 Uhr



9 : 15 Uhr



23 : 45 Uhr



10 : 00 Uhr

