

Name:

Klasse:

Mathematik

# Zeitaufgaben (gemischt) 5




1 Zeichne die Uhrzeit richtig ein!


17 : 15 Uhr



2 : 00 Uhr




9 : 45 Uhr




6 : 00 Uhr



14 : 45 Uhr




18 : 15 Uhr



13 : 45 Uhr



00 : 15 Uhr



16 : 00 Uhr

