

Name:

Klasse:

Mathematik

# Zeitaufgaben (gemischt) 6




1 Zeichne die Uhrzeit richtig ein!


12 : 45 Uhr



1 : 30 Uhr




18 : 15 Uhr




19 : 45 Uhr



23 : 00 Uhr




07 : 15 Uhr



13 : 30 Uhr



8 : 00 Uhr



21 : 30 Uhr

