

Name:

Klasse:

Mathematik

Zeitaufgaben (gemischt) 8




1 Zeichne die Uhrzeit richtig ein!


13 : 25 Uhr



21 : 10 Uhr




6 : 05 Uhr




7 : 05 Uhr



11 : 40 Uhr




18 : 35 Uhr



1 : 05 Uhr



20 : 55 Uhr



2 : 15 Uhr

