

Name:

Klasse:

Mathematik

Zeitaufgaben (halbe Stunde) 3




1 Zeichne die Uhrzeit richtig ein!


17 : 30 Uhr



2 : 30 Uhr




9 : 30 Uhr




6 : 30 Uhr



14 : 30 Uhr




18 : 30 Uhr



13 : 30 Uhr



00 : 30 Uhr



16 : 30 Uhr

