

Name:

Klasse:

Mathematik

# Zeitaufgaben (halbe Stunde) 4




1 Zeichne die Uhrzeit richtig ein!


18 : 30 Uhr



12 : 30 Uhr




19 : 30 Uhr




6 : 30 Uhr




3 : 30 Uhr




14 : 30 Uhr



11 : 30 Uhr



21 : 30 Uhr



22 : 30 Uhr

