

Name:

Klasse:

Mathematik

Zeitaufgaben (viertel Stunde) 2




1 Zeichne die Uhrzeit richtig ein!


17 : 15 Uhr



2 : 15 Uhr




9 : 15 Uhr




6 : 15 Uhr



14 : 15 Uhr




18 : 15 Uhr



13 : 15 Uhr



00 : 15 Uhr



16 : 15 Uhr

