

Name:

Klasse:

Mathematik

Zeitaufgaben (viertel Stunde) 3




1 Zeichne die Uhrzeit richtig ein!


15 : 15 Uhr



1 : 15 Uhr




8 : 15 Uhr




9 : 15 Uhr



10 : 15 Uhr




15 : 15 Uhr



19 : 15 Uhr



20 : 15 Uhr



12 : 15 Uhr

