

Name:

Klasse:

Mathematik

# Zeitaufgaben (viertel Stunde) 5




1 Zeichne die Uhrzeit richtig ein!


17 : 45 Uhr



16 : 15 Uhr




11 : 15 Uhr




12 : 45 Uhr



13 : 15 Uhr




22 : 45 Uhr



23 : 45 Uhr



2 : 15 Uhr



10 : 45 Uhr

