

Name:

Klasse:

Mathematik

Zeitaufgaben (viertel Stunde) 6




1 Zeichne die Uhrzeit richtig ein!


14 : 45 Uhr



18 : 45 Uhr




10 : 45 Uhr




22 : 45 Uhr



5 : 45 Uhr




1 : 45 Uhr



11 : 45 Uhr



23 : 15 Uhr



2 : 45 Uhr

