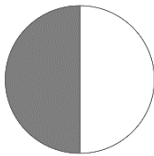



Brüche 3

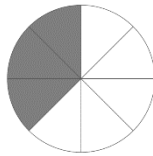
Schreibe unter jedes Bild den richtigen Bruch.



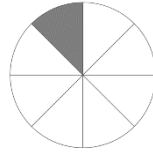
$$\frac{1}{2}$$



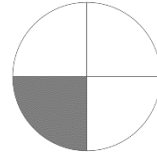
$$\frac{4}{4}$$



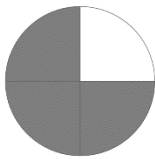
$$\frac{3}{8}$$




$$\frac{1}{8}$$



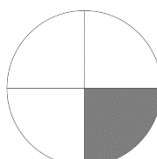
$$\frac{1}{4}$$



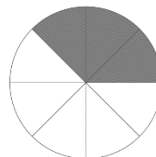
$$\frac{3}{4}$$



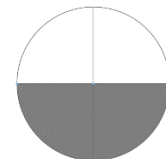
$$\frac{1}{2}$$



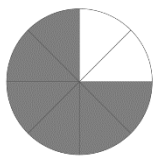
$$\frac{1}{4}$$



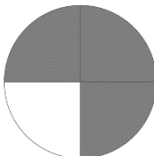
$$\frac{3}{8}$$



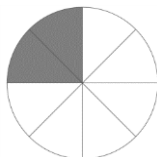
$$\frac{2}{4}$$



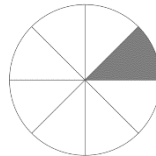
$$\frac{6}{8}$$



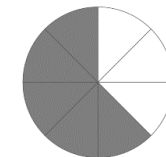
$$\frac{3}{4}$$



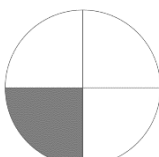
$$\frac{2}{8}$$



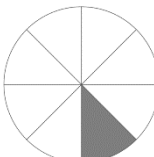
$$\frac{1}{8}$$



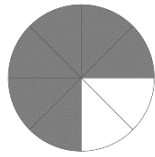
$$\frac{5}{8}$$



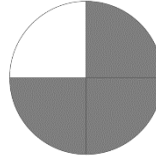
$$\frac{1}{4}$$



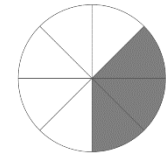
$$\frac{1}{8}$$



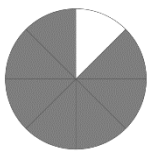
$$\frac{6}{8}$$



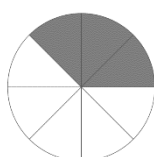
$$\frac{3}{4}$$



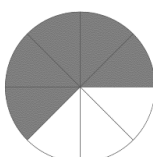
$$\frac{3}{8}$$



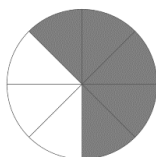
$$\frac{7}{8}$$




$$\frac{3}{8}$$



$$\frac{5}{8}$$



$$\frac{5}{8}$$



$$\frac{8}{8}$$