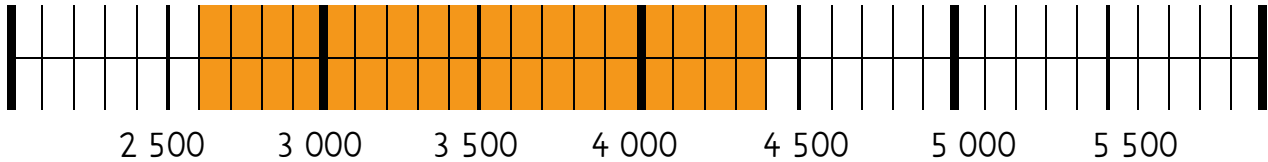


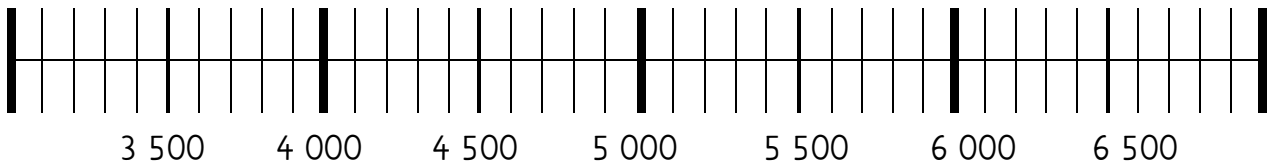


# Zahlenstrahl 1

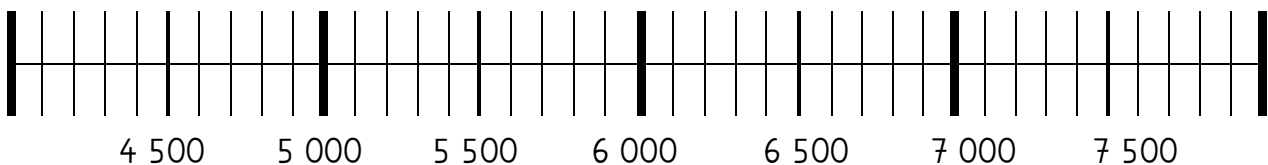
Berechne die Aufgabe und trage sie in den Zahlenstrahl ein.



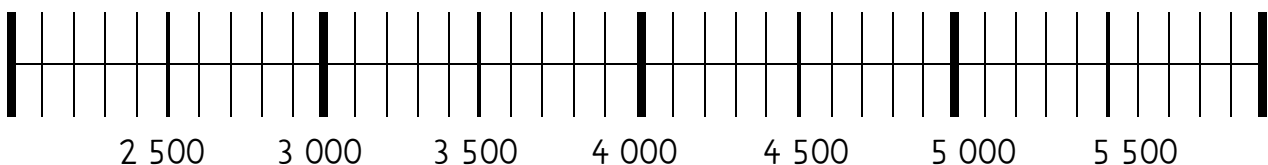
$$2\,600 + 1\,800 = \underline{\hspace{2cm}}$$



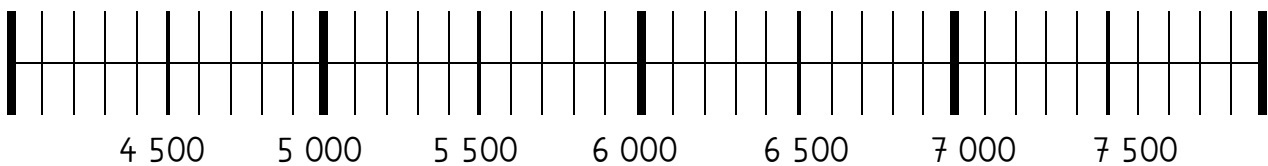
$$3\,800 + 2\,300 = \underline{\hspace{2cm}}$$



$$4\,300 + 2\,800 = \underline{\hspace{2cm}}$$



$$2\,100 + 3\,900 = \underline{\hspace{2cm}}$$



$$4\,600 + 2\,500 = \underline{\hspace{2cm}}$$