


Euro und Cent

Wie viel Geld ist das? 4









Zahlenraum 20

gemischte Aufgaben 1



Rechne aus

$12 + 7 = \underline{\quad}$

$7 + 12 = \underline{\quad}$

$8 - 5 = \underline{\quad}$

$11 + 7 = \underline{\quad}$

$6 + 14 = \underline{\quad}$

$9 + 3 = \underline{\quad}$

$2 + 7 = \underline{\quad}$

$7 + 12 = \underline{\quad}$

$2 + 9 = \underline{\quad}$

$5 + 7 = \underline{\quad}$

$3 + 14 = \underline{\quad}$

$7 + 8 = \underline{\quad}$

$7 + 7 = \underline{\quad}$

$17 - 9 = \underline{\quad}$

$3 + 7 = \underline{\quad}$

$4 + 7 = \underline{\quad}$

$3 + 12 = \underline{\quad}$

$8 + 5 = \underline{\quad}$

$8 - 7 = \underline{\quad}$

$4 + 13 = \underline{\quad}$

$8 - 4 = \underline{\quad}$

$7 + 8 = \underline{\quad}$

$1 + 17 = \underline{\quad}$

$5 + 6 = \underline{\quad}$

$9 - 7 = \underline{\quad}$

$9 + 10 = \underline{\quad}$

$7 + 6 = \underline{\quad}$

$4 + 3 = \underline{\quad}$

$7 + 12 = \underline{\quad}$

$9 + 5 = \underline{\quad}$

$5 + 7 = \underline{\quad}$

$9 - 9 = \underline{\quad}$

$3 + 6 = \underline{\quad}$

$4 + 9 = \underline{\quad}$

$7 + 11 = \underline{\quad}$

$9 + 7 = \underline{\quad}$



Gerade und ungerade Zahlen 1

1. Male alle geraden Zahlen blau und alle ungerade Zahlen rot an.

10	11	12	13	14	15	16	17	18	19	20	21	22	23	24	25	26
----	----	----	----	----	----	----	----	----	----	----	----	----	----	----	----	----

2. Gerade oder ungerade Zahlen? Unterstreiche.



gerade | ungerade




gerade | ungerade




gerade | ungerade



gerade | ungerade




gerade | ungerade




gerade | ungerade



gerade | ungerade



gerade | ungerade



gerade | ungerade

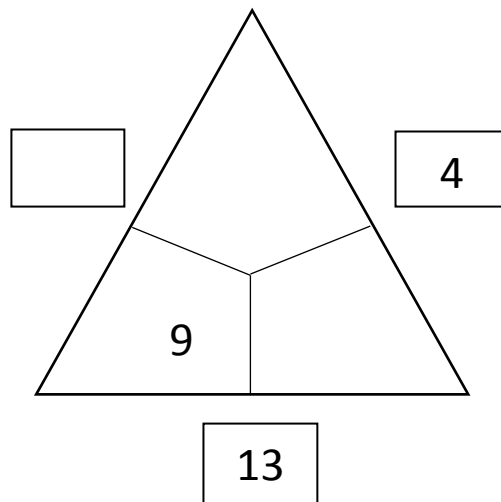
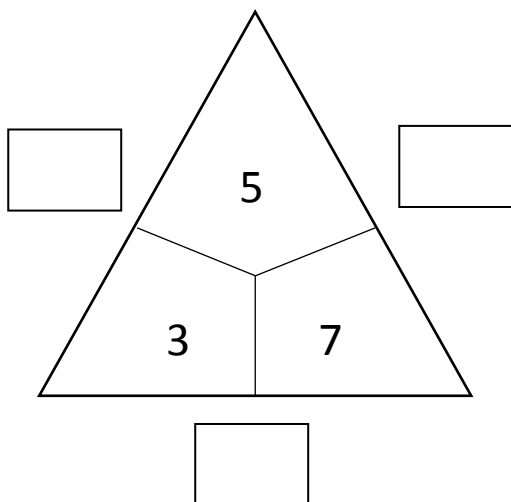
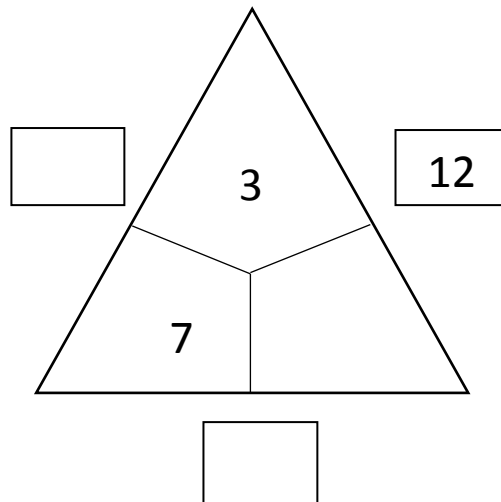
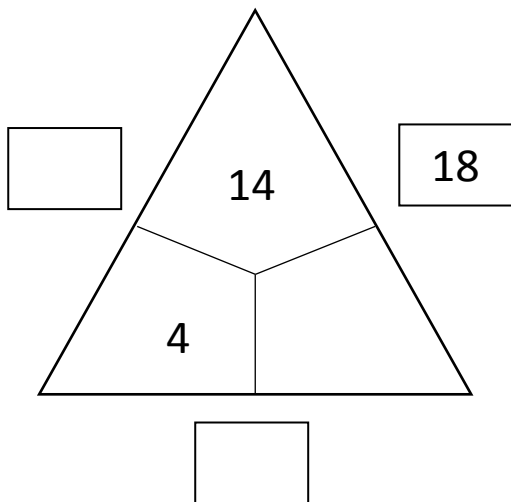
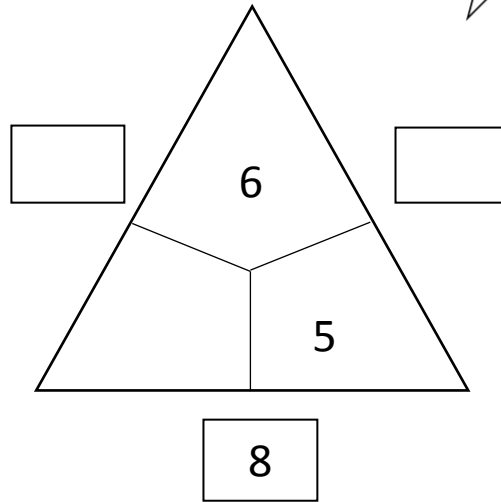
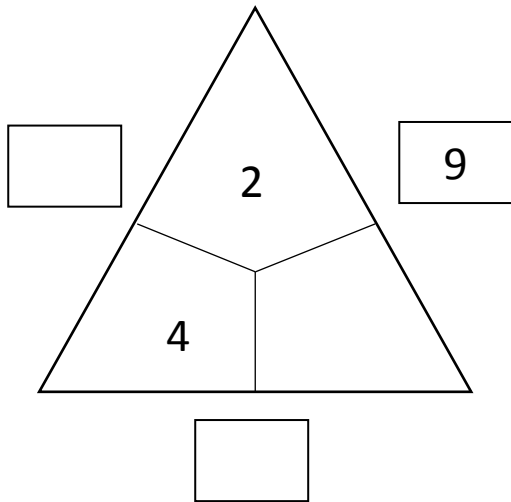

3. Trage die geraden und die ungeraden Zahlen richtig in die Tabelle ein.

5 10 19 3 9 11 18 7 12 20 8 13 6
16 4 17 1 15 2 14

gerade												
ungerade												

Rechendreiecke 1

Welche Zahlen gehören in die Felder?





Rechenhäuser 1

+6	
	8
	7
	6
	5
	4

+10	
	19
	18
	17
	16
	15

+1	
	1
	2
	3
	4
	5

-7	
	12
	13
	14
	15
	16

-5	
	12
	13
	14
	15
	16

-9	
	5
	4
	7
	6
	3

Rechentabellen 1



Berechne:

+	6	2	5	8	3	4	7	1	9
8									
11									
10									
9									
7									

-	6	2	5	8	3	4	7	1	9
17									
19									
12									
15									
10									

Verdoppeln und Halbieren 1

Verdoppeln

die Zahl	10	2	4	8	5	6	9	7	3
das Doppelte									

Halbieren

die Zahl	14	18	12	6	4	2	10	8	16
die Hälfte									

Gemischte Aufgaben

die Zahl	10		6				9	4	3
das Doppelte		14		18	10	16			

