


Euro und Cent

Ergänze auf 20 Euro. 2



Zahlenraum 20

gemischte Aufgaben 3



Rechne aus.

$17 - 9 = \underline{\quad}$

$5 + 8 = \underline{\quad}$

$13 - 1 = \underline{\quad}$

$9 - 4 = \underline{\quad}$

$7 + 7 = \underline{\quad}$

$13 - 5 = \underline{\quad}$

$16 - 9 = \underline{\quad}$

$4 + 6 = \underline{\quad}$

$16 - 7 = \underline{\quad}$

$14 - 5 = \underline{\quad}$

$4 + 5 = \underline{\quad}$

$13 - 6 = \underline{\quad}$

$4 + 6 = \underline{\quad}$

$14 + 3 = \underline{\quad}$

$12 + 5 = \underline{\quad}$

$4 + 4 = \underline{\quad}$

$13 + 2 = \underline{\quad}$

$15 + 3 = \underline{\quad}$

$6 + 7 = \underline{\quad}$

$18 + 1 = \underline{\quad}$

$14 + 5 = \underline{\quad}$

$14 - 9 = \underline{\quad}$

$17 - 5 = \underline{\quad}$

$18 - 8 = \underline{\quad}$

$17 - 4 = \underline{\quad}$

$10 - 7 = \underline{\quad}$

$15 - 15 = \underline{\quad}$

$17 - 2 = \underline{\quad}$

$7 - 4 = \underline{\quad}$

$19 - 16 = \underline{\quad}$

$18 - 7 = \underline{\quad}$

$6 + 12 = \underline{\quad}$

$1 + 18 = \underline{\quad}$

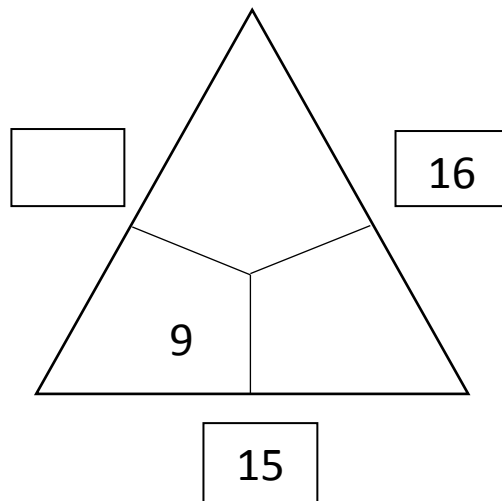
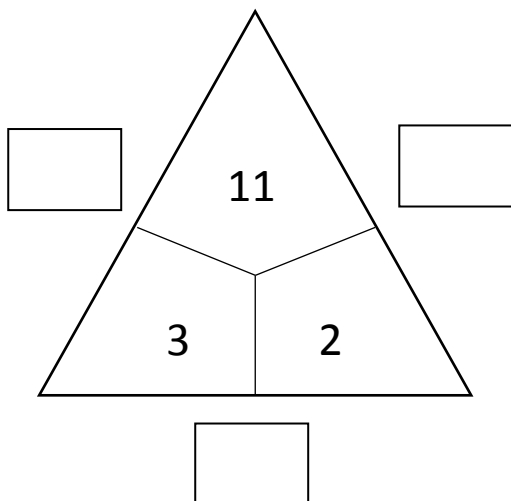
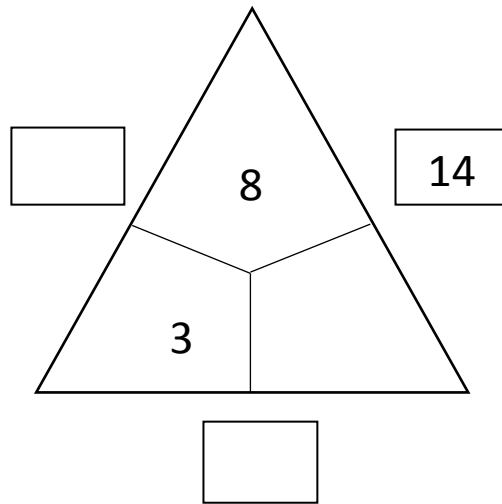
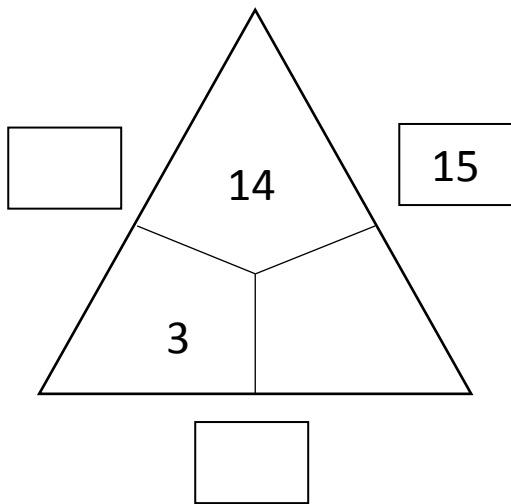
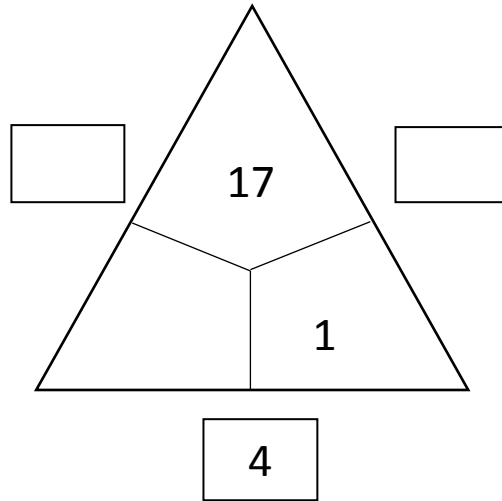
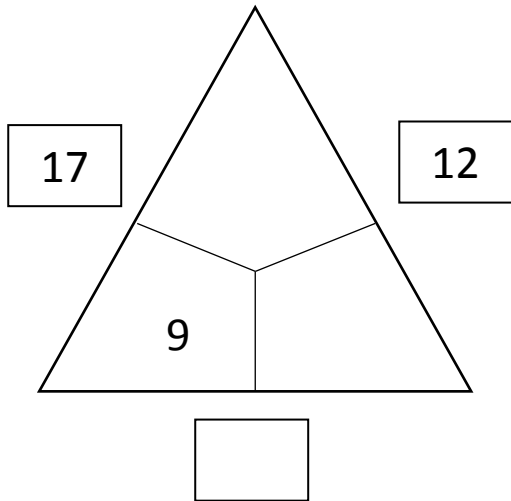

$11 + 4 = \underline{\quad}$

$4 + 15 = \underline{\quad}$

$4 + 15 = \underline{\quad}$

Rechendreiecke 3

Welche Zahlen gehören in die Felder?





Rechenhäuser 3

$+7$	
	18
	17
	16
	15
	14

$+6$	
	15
	14
	13
	12
	11


$+8$	
	12
	13
	14
	15
	16

-3	
	12
	13
	14
	15
	16

-6	
	9
	10
	11
	12
	13

-9	
	5
	4
	3
	2
	1

Rechentabellen 3




Berechne:

+	9	1	8	2	7	3	6	4	5
11									
2									
10									
3									
9									

-	9	1	8	2	7	3	6	4	5
20									
10									
19									
11									
18									

Verdoppeln und Halbieren 3



1. Teile die Sterne in 2 Gruppen.

2. Teile die Zahlen in zwei gleich große Hälften

$$4 = 2 + 2$$

$$8 = \text{-----}$$

$$14 = \text{-----}$$

$$12 = \text{-----}$$

$$18 = \text{-----}$$

3. Verdopple die Zahlen

$$4 + 4 = 8$$

$$8 + \text{-----} = \text{-----}$$

$$7 + \text{-----} = \text{-----}$$

$$3 + \text{-----} = \text{-----}$$

$$5 + \text{-----} = \text{-----}$$