


Euro und Cent

Ergänze auf 20 Euro. 3



Zahlenraum 20

gemischte Aufgaben 4



Rechne aus.

$19 - 9 = \underline{\quad}$

$7 + 8 = \underline{\quad}$

$15 - 1 = \underline{\quad}$

$9 - 6 = \underline{\quad}$

$7 + 9 = \underline{\quad}$

$13 - 7 = \underline{\quad}$

$19 - 8 = \underline{\quad}$

$7 + 6 = \underline{\quad}$

$16 - 7 = \underline{\quad}$

$14 - 7 = \underline{\quad}$

$4 + 7 = \underline{\quad}$

$14 - 7 = \underline{\quad}$

$15 + 6 = \underline{\quad}$

$16 + 3 = \underline{\quad}$

$14 + 5 = \underline{\quad}$

$5 + 7 = \underline{\quad}$

$14 + 3 = \underline{\quad}$

$16 + 4 = \underline{\quad}$

$7 + 7 = \underline{\quad}$

$13 + 1 = \underline{\quad}$

$11 + 6 = \underline{\quad}$

$15 - 8 = \underline{\quad}$

$18 - 6 = \underline{\quad}$

$18 - 10 = \underline{\quad}$

$18 - 9 = \underline{\quad}$

$16 - 8 = \underline{\quad}$

$16 - 16 = \underline{\quad}$

$16 - 3 = \underline{\quad}$

$8 - 5 = \underline{\quad}$

$20 - 17 = \underline{\quad}$

$18 - 9 = \underline{\quad}$

$5 + 13 = \underline{\quad}$

$2 + 11 = \underline{\quad}$


$13 + 4 = \underline{\quad}$

$5 + 5 = \underline{\quad}$

$2 + 16 = \underline{\quad}$

Kettenaufgaben

Übungen 5:



Plusaufgaben:

$$5 + 4 + 6 + 2 = \underline{\hspace{2cm}}$$

$$1 + 4 + 8 + 4 = \underline{\hspace{2cm}}$$

$$2 + 4 + 5 + 2 = \underline{\hspace{2cm}}$$

$$3 + 2 + 9 + 4 = \underline{\hspace{2cm}}$$

$$7 + 6 + 1 + 2 = \underline{\hspace{2cm}}$$

$$3 + 7 + 1 + 9 = \underline{\hspace{2cm}}$$

Minusaufgaben:

$$15 - 4 - 6 - 2 = \underline{\hspace{2cm}}$$

$$16 - 7 - 3 - 4 = \underline{\hspace{2cm}}$$

$$19 - 4 - 7 - 1 = \underline{\hspace{2cm}}$$

$$20 - 2 - 6 - 4 = \underline{\hspace{2cm}}$$

$$18 - 5 - 6 - 3 = \underline{\hspace{2cm}}$$

$$16 - 8 - 7 - 1 = \underline{\hspace{2cm}}$$

Gemischte Aufgaben:

$$15 + 4 - 6 - 2 = \underline{\hspace{2cm}}$$

$$13 - 2 - 6 + 4 = \underline{\hspace{2cm}}$$

$$19 - 4 - 6 + 2 = \underline{\hspace{2cm}}$$

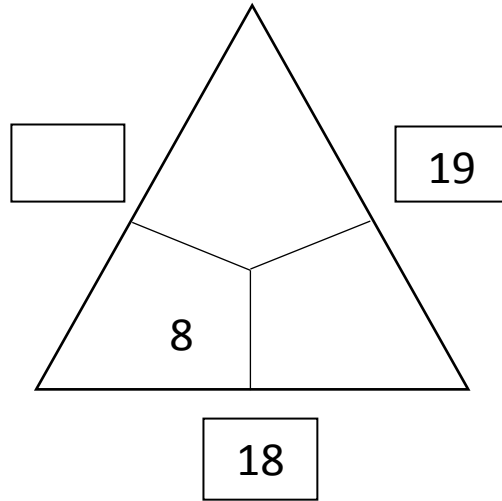
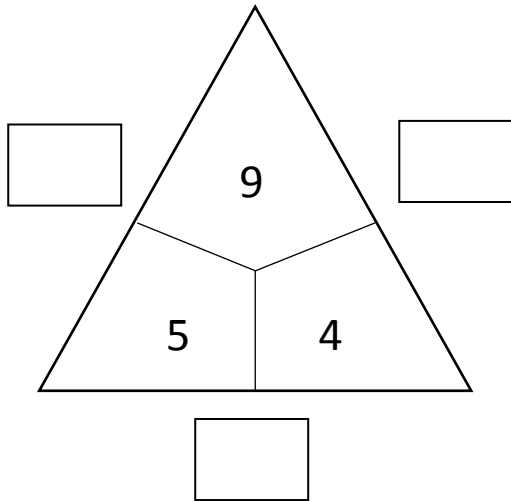
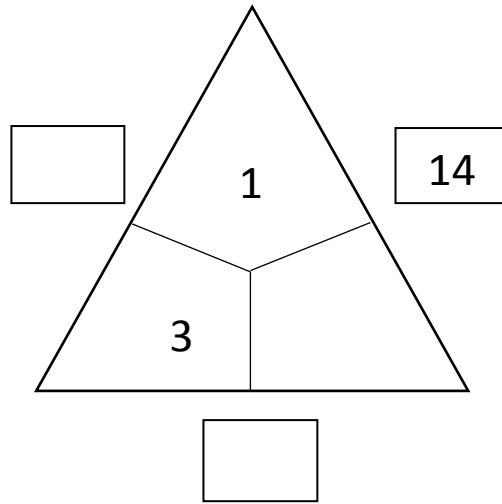
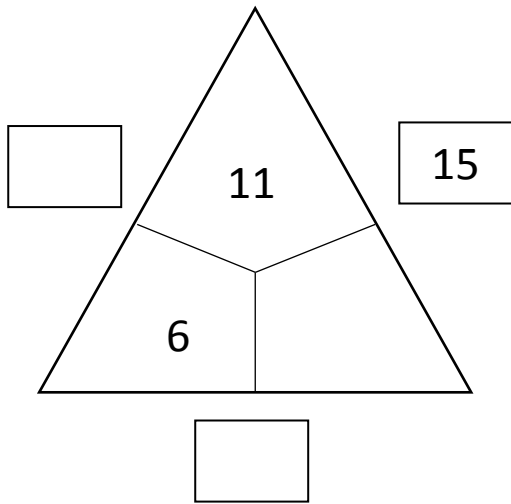
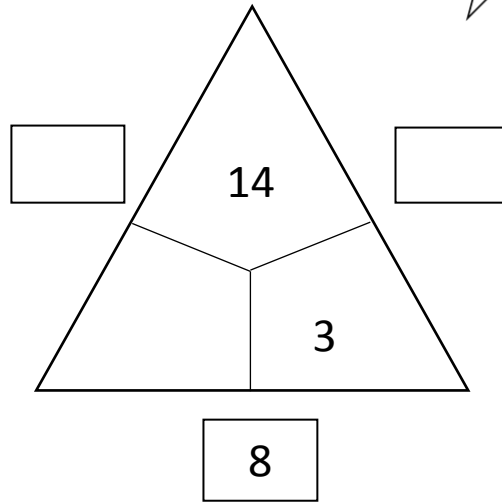
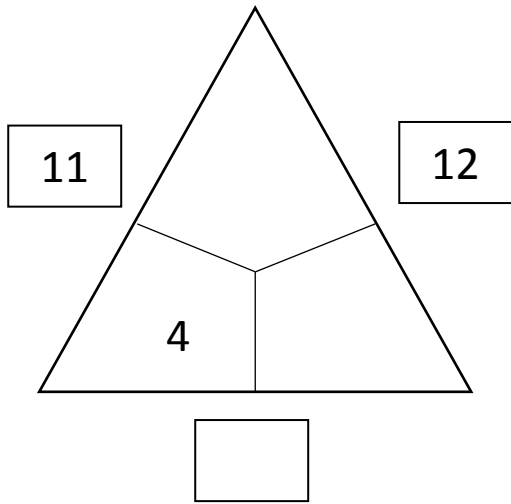

$$11 - 5 + 3 - 4 = \underline{\hspace{2cm}}$$

$$14 - 7 + 6 - 2 = \underline{\hspace{2cm}}$$

$$15 + 4 - 6 - 4 = \underline{\hspace{2cm}}$$

Rechendreiecke 4

Welche Zahlen gehören in die Felder?





Rechenhäuser 4

+11	
	18
	17
	16
	15
	14

+4	
	19
	18
	17
	16
	15

+9	
	11
	12
	13
	14
	15

-11	
	2
	3
	4
	5
	6

-14	
	2
	3
	4
	5
	6

-9	
	5
	4
	7
	6
	3

Rechentabellen 4



Berechne:

+	9	1	8	2	7	3	6	4	5
11									
2									
10									
3									
9									


Rechenhäuser

19	
11	
10	
8	
17	
9	

15	
10	
14	
5	
7	
12	

17	
12	
7	
9	
14	
10	

Verdoppeln und Halbieren 4



1. Teile die Sterne in 2 Gruppen.

2. Teile die Zahlen in zwei gleich große Hälften

$$4 = 2 + 2$$

$$6 = \text{-----}$$

$$10 = \text{-----}$$

$$2 = \text{-----}$$

$$16 = \text{-----}$$

3. Verdopple die Zahlen

$$4 + 4 = 8$$

$$8 + \text{-----} = \text{-----}$$

$$7 + \text{-----} = \text{-----}$$

$$3 + \text{-----} = \text{-----}$$

$$5 + \text{-----} = \text{-----}$$

